



Cut out the pictures and statements.

Use the sentences to match each picture or use them to help you write your own.

Look at them carefully! Not all of them are correct.

There are 3 chicks in the farm. 1 more joins them so there will be 4 chicks.



3 children are playing. 1 child has to go home so there will be 2 children left.

There are 5 candles on a birthday cake. 1 gets blown out. There will be 4 left.

There are 7 trees on the farm. 1 tree is chopped down. There will be 4 trees left.

There are 9 kites in the sky. I buy 1 more to fly. I now have 10 kites.

There are 4 balloons on an invitation. I draw 1 more on. There will be 5 balloons.





Use the sentences to match each picture or use them to help you write your own.
Look at them carefully! Not all of them are correct.

There are 3 chicks in the farm. 1 more joins them so there will be 4 chicks.


There are 5 candles on a birthday cake. 1 gets blown out. There will be 4 left.

There are 9 kites in the sky. I buy 1 more to fly. I now have 10 kites.

3 children are playing. 1 child has to go home so there will be 2 children left.

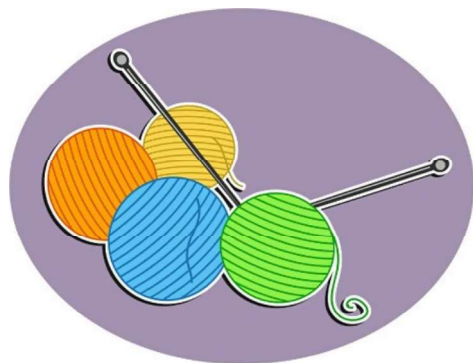


There are 4 balloons on an invitation. I draw 1 more on. There will be 5 balloons.

There are 7 trees on the farm. 1 tree is chopped down. There will be 4 trees left.






Cut out the cards and make one addition and one subtraction sentence for each picture.
Add or subtract 2 or 3.






Make one addition and one subtraction sentence for each picture. Add or subtract 2 or 3.














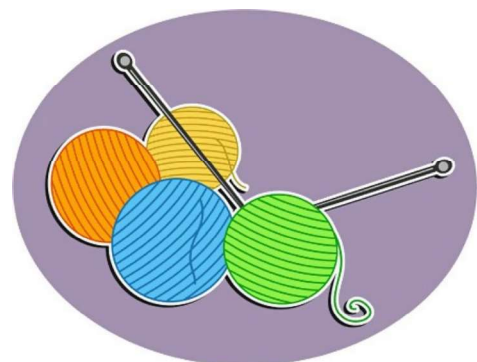







Make one addition and one subtraction sentence for each picture.


Add or subtract any 1 digit number from 2-9.

Write a number sentence as well as a written sentence.





Make one addition and one subtraction sentence for each picture.
Add or subtract a 1-digit number from 2 - 9
















Arithmetic

★	★★	★★★
$7 + 1 =$	$17 + 2 =$	$16 + 8 =$
$4 - 1 =$	$27 - 3 =$	$23 - 5 =$
$15 + 1 =$	$52 + 3 =$	$4 + 67 =$
$6 + 1 =$	$2 + 27 =$	$78 + 3 =$
$1 + 23 =$	$44 - 4 =$	$91 - 7 =$
$18 - 1 =$	$16 + 2 =$	$3 + 34 = 43 - \underline{\hspace{1cm}}$
$10 + 1 =$	$19 - 5 =$	$22 + 8 = 21 + \underline{\hspace{1cm}}$
$29 - 1 =$	$71 + 4 =$	$6 + 21 = 30 - \underline{\hspace{1cm}}$
$13 - 1 =$	$2 + 81 =$	$45 + 6 = 47 + \underline{\hspace{1cm}}$
$27 - 1 =$	$67 - 7 =$	$76 - 4 = 70 + \underline{\hspace{1cm}}$

TRUE or FALSE?

These four calculations have the same answer.

$$2 + 3 + 4 \quad 4 + 2 + 3$$

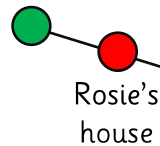
$$3 + 4 + 2 \quad 2 + 4 + 3$$

These four calculations have the same answer.

$$9 - 3 - 2 \quad 9 - 2 - 3$$

$$3 - 9 - 2 \quad 3 - 2 - 9$$

Zach's
house



Zach lives 6 km from the school.
Rosie lives 5 km from the school in
the same direction.

What is the distance between Zach's and Rosie's
houses?

After travelling to and from school, Zach thinks
that he will walk 1 km more than Rosie. Is he
correct? Explain your answer.

What will be the difference in the distance
walked after 2 school days?

TRUE or FALSE?

These four calculations have the same answer.

$$2 + 3 + 4 \quad 4 + 2 + 3$$

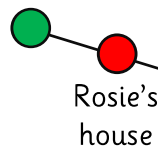
$$3 + 4 + 2 \quad 2 + 4 + 3$$

These four calculations have the same answer.

$$9 - 3 - 2 \quad 9 - 2 - 3$$

$$3 - 9 - 2 \quad 3 - 2 - 9$$

Zach's
house



Zach lives 6 km from the school.
Rosie lives 5 km from the school in
the same direction.

What is the distance between Zach's and Rosie's
houses?

After travelling to and from school, Zach thinks
that he will walk 1 km more than Rosie. Is he
correct? Explain your answer.

What will be the difference in the distance
walked after 2 school days?